


Show Your Work!

Math

1. Mae-Ying bought a package of paper priced at \$1.98 and 2 pens priced at \$0.49 each. The tax on the entire purchase was 18¢. What was the total cost of the items?
2. Seventy-five beans were equally divided into five pots. How many beans were in each pot?
3. Robo could run 7 miles in 1 hour. At that rate, how many miles could Robo run in 3 hours?
4. At 11:45 A.M. Jason glanced at the clock. His doctor's appointment was in $2\frac{1}{2}$ hours. At what time was his appointment?
5. Find the sixth number in this counting sequence: 7, 14, 21, ...

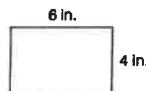
6. Write the number of shaded rectangles shown as a mixed number.



7. Twenty-five percent of this square is shaded. What percent of the square is not shaded?



8. What is the perimeter of this rectangle?



9. A square has one side that is 7 inches long. What is the area of the square?

10. To what number is the arrow pointing?



11. $4.2 + 3.5 + 0.25 + 4.0$

$$\begin{array}{r} 12. \quad 460 \\ \times \quad 9 \\ \hline \end{array}$$

$$13. \quad 6 \overline{)3795}$$

$$14. \quad 6 \times 4 \times 10$$

$$\begin{array}{r} 15. \quad \$4.86 \\ + \$2.95 \\ \hline \end{array}$$

Find each missing number for 16–17:

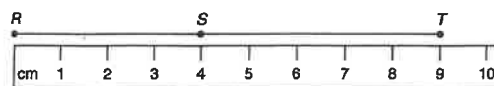
$$\begin{array}{r} 16. \quad z \\ + 179 \\ \hline 496 \end{array}$$

$$\begin{array}{r} 17. \quad 67 \\ - B \\ \hline 16 \end{array}$$

18. Use digits to write the number three hundred forty-three.

19. Which digit in 6.125 is in the hundredths place?

20. What is the length of \overline{ST} ?



1	2	3	4
5	6	7	8
9	10	11	12
13	14	15	16
17	18	19	20